

TSPH

JEE • NEET • MHT-CET

**NEET 2023 ANSWER KEY
PHYSICS**

TSPH

JEE • NEET • MHT-CET

The Science Private's Hub

**XI-XII SCIENCE
JEE (Mains & Adv.) | NEET | MHT-CET**



www.tsph.in

F6

NEET 2023

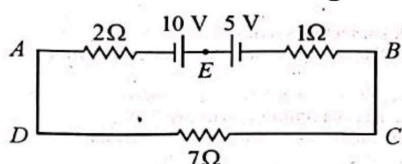
Physics

Section – A (Compulsory)

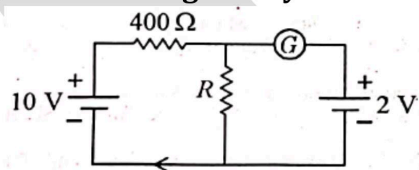
1. In a series LCR circuit, the inductance L is 10 mH , capacitance C is $1\text{ }\mu\text{F}$ and resistance R is $100\text{ }\Omega$. The frequency at which resonance occurs is:

- (1) 15.9 kHz (2) 1.59 rad/s
 (3) 1.59 kHz (4) 15.9 rad/s

2. The magnitude and direction of the current in the following circuit is



- (1) 0.5 A from A to B through E
 (2) $\frac{5}{9}\text{ A}$ from A to B through E
 (3) 1.5 A from B to A through E
 (4) 0.2 A from B to A through E
3. If the galvanometer G does not show any deflection in the circuit shown, the value of R is given by:



- (1) $50\text{ }\Omega$ (2) $100\text{ }\Omega$
 (3) $400\text{ }\Omega$ (4) $200\text{ }\Omega$
4. The temperature of a gas is -50°C . To what temperature the gas should be heated so that the rms speed is increased by 3 times?
- (1) 3295°C (2) 3097 K
 (3) 223 K (4) 669°C

5. The ratio of radius of gyration of a solid sphere of mass M and radius R about its own axis to the radius of gyration of the thin hollow sphere of same mass and radius about its axis is:

- (1) $5:3$ (2) $2:5$
 (3) $5:2$ (4) $3:5$

6. A Carnot engine has an efficiency of 50% when its source is at a temperature 327°C . The temperature of the sink is:

- (1) 15°C (2) 100°C
 (3) 200°C (4) 27°C

7. A bullet is fired from a gun at the speed of 280 ms^{-1} in the direction 30° above the horizontal. The maximum height attained by the bullet is ($g = 9.8\text{ m s}^{-1}$, $\sin 30^\circ = 0.5$):

- (1) 2000 m (2) 1000 m
 (3) 3000 m (4) 2800 m

8. An electric dipole is placed at an angle of 30° with an electric field of intensity $2 \times 10^5\text{ N C}^{-1}$. It experiences a torque equal to 4 N m . Calculate the magnitude of charge on the dipole, if the dipole length is 2 cm .

- (1) 6 mC (2) 4 mC
 (3) 2 mC (4) 8 mC

9. Given below are two statements:

Statement I: Photovoltaic devices can convert optical radiation into electricity.
Statement II: Zener diode is designed to operate under reverse bias in breakdown region.

In the light of the above statements, choose the most appropriate answer from the options given below:

- (1) Both **Statement I** and **Statement II** are incorrect.
- (2) **Statement I** is correct but **Statement II** is incorrect.
- (3) **Statement I** is incorrect but **Statement II** is correct
- (4) **Both Statement I and Statement II are correct.**
10. The errors in the measurement which arise due to unpredictable fluctuations in temperature and voltage supply are:
- (1) Personal errors
- (2) Least count errors
- (3) **Random errors**
- (4) Instrumental errors
11. The ratio of frequencies of fundamental harmonic produced by an open pipe to that of closed pipe having the same length is:
- (1) **2:1** (2) 1:3
- (3) 3:1 (4) 1:2
12. The net magnetic flux through any closed surface is :
- (1) Positive (2) Infinity
- (3) Negative (4) **Zero**
13. The work functions of Caesium (Cs), Potassium (K) and Sodium (Na) are 2.14 eV, 2.30 eV and 2.75 eV respectively. If incident electromagnetic radiation has an incident energy of 2.20 eV, which of these photosensitive surfaces may emit photoelectrons?
- (1) Both Na and K (2) K only
- (3) Na only (4) **Cs only**

14. The minimum wavelength of X-rays produced by an electron accelerated through a potential difference of V volts is proportional to:

(1) $\frac{1}{V}$ (2) $\frac{1}{\sqrt{V}}$

(3) V^2 (4) \sqrt{V}

15. A 12 V, 60 W lamp is connected to the secondary of a step down transformer, whose primary is connected to ac mains of 220 V. Assuming the transformer to be ideal, what is the current in the primary winding?

(1) 2.7 A (2) 3.7 A

(3) 0.37 A (4) **0.27 A**

16. Light travels a distance x in time t_1 in air and $10x$ in time t_2 in another denser medium. What is the critical angle for this medium?

(1) $\sin^{-1}\left(\frac{10t_2}{t_1}\right)$ (2) $\sin^{-1}\left(\frac{t_1}{10t_2}\right)$

(3) $\sin^{-1}\left(\frac{10t_1}{t_2}\right)$ (4) $\sin^{-1}\left(\frac{t_2}{t_1}\right)$

17. A metal wire has mass (0.4 ± 0.002) g, radius (0.3 ± 0.001) mm and length (5 ± 0.02) cm. The maximum possible percentage error in the measurement of density will nearly be:

(1) 1.3% (2) **1.6%**

(3) 1.4% (4) 1.2%

18. For Young's double slit experiment, two statements are given below:

Statement I: If screen is moved away from the plane of slits, angular separation of the fringes remains constant.

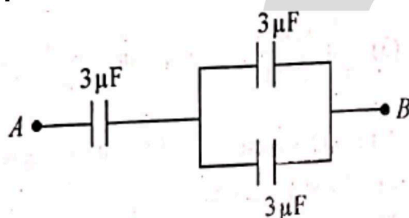
Statement II: If the monochromatic source is replaced by another monochromatic source of larger wavelength, the angular separation of fringes decreases.

In the light of the above statements, choose the correct answer from the options given below :

- (1) Both **Statement I** and **Statement II** are false.
- (2) **Statement I is true but Statement II is false.**
- (3) **Statement I** is false but **Statement II** is true.
- (4) Both **Statement I** and **Statement II** are true.

19. The half life of a radioactive substance is 20 minutes. In how much time, the activity of substance drops to $\left(\frac{1}{16}\right)^{\text{th}}$ of its initial value?
- (1) 40 minutes (2) 60 minutes
 - (3) **80 minutes** (4) 20 minutes

20. The equivalent capacitance of the system shown in the following circuit is :



- (1) $3\ \mu\text{F}$ (2) $6\ \mu\text{F}$
 - (3) $9\ \mu\text{F}$ (4) **$2\ \mu\text{F}$**
21. Resistance of a carbon resistor determined from colour codes is $(22000 \pm 5\%)\ \Omega$. The colour of third band must be :
- (1) Green (2) **Orange**
 - (3) Yellow (4) Red
22. An ac source is connected to a capacitor C. Due to decrease in its operating frequency:
- (1) displacement current increases.
 - (2) **displacement current decreases.**

- (3) capacitive reactance remains constant
- (4) capacitive reactance decreases.

23. A vehicle travels half the distance with speed v and the remaining distance with speed $2v$. Its average speed is:

- (1) $\frac{2v}{3}$ (2) **$\frac{4v}{3}$**
- (3) $\frac{3v}{4}$ (4) $\frac{v}{3}$

24. The amount of energy required to form a soap bubble of radius 2 cm from a soap solution is nearly : (surface tension of soap solution = $0.03\ \text{N m}^{-1}$)

- (1) $5.06 \times 10^{-4}\ \text{J}$ (2) **$3.01 \times 10^{-4}\ \text{J}$**
- (3) $50.1 \times 10^{-4}\ \text{J}$ (4) $30.16 \times 10^{-4}\ \text{J}$

25. The venturi-meter works on:

- (1) **Bernoulli's principle**
- (2) The principle of parallel axes
- (3) The principle of perpendicular axes
- (4) Huygen's principle

26. In hydrogen spectrum, the shortest wavelength in the Balmer series is λ . The shortest wavelength in the Brackett series is :

- (1) 4λ (2) 9λ
- (3) **16λ** (4) 2λ

27. The potential energy of a long spring when stretched by 2 cm is U. If the spring is stretched by 8 cm, potential energy stored in it will be:

- (1) $4U$ (2) $8U$
- (3) **$16U$** (4) $2U$

28. A full wave rectifier circuit consists of two p-n junction diodes, a centre-tapped transformer, capacitor and a load resistance. Which of these components remove the ac ripple from the rectified output?

- (1) p-n junction diodes

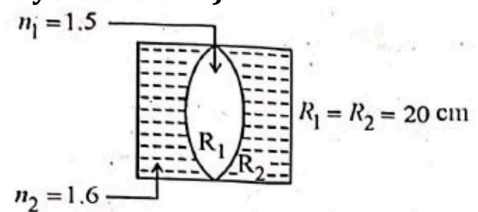
- (2) Capacitor
 (3) Load resistance
 (4) A centre-tapped transformer
29. The magnetic energy stored in an inductor of inductance $4 \mu\text{H}$ carrying a current of 2 A is:
 (1) 4 mJ (2) 8 mJ
 (3) $8 \mu\text{J}$ (4) $4 \mu\text{J}$
30. If $\oint_s \vec{E} \cdot d\vec{S} = 0$ over a surface, then :
 (1) the magnitude of electric field on the surface is constant.
 (2) all the charges must necessarily be inside the surface.
 (3) the electric field inside the surface is necessarily uniform.
 (4) the number of flux lines entering the surface must be equal to the number of flux lines leaving it.
31. A football player is moving southward and suddenly turns eastward with the same speed to avoid an opponent. The force that acts on the player while turning is:
 (1) along northward
 (2) along north-east
 (3) along south-west
 (4) along eastward
32. Let a wire be suspended from the ceiling (rigid support) and stretched by a weight W attached at its free end. The longitudinal stress at any point of cross-sectional area of the wire is:
 (1) W/A (2) $W/2A$
 (3) Zero (4) $2W/A$
33. The angular acceleration of a body, moving along the circumference of a circle, is:
 (1) along the radius towards the centre
 (2) along the tangent to its position

- (3) along the axis of rotation
 (4) along the radius, away from centre

34. In a plane electromagnetic wave travelling in free space, the electric field component oscillates sinusoidally at a frequency of $2.0 \times 10^{10} \text{ Hz}$ and amplitude 48 Vm^{-1} . Then the amplitude of oscillating magnetic field is: (Speed of light in free space = $3 \times 10^8 \text{ m s}^{-1}$)
 (1) $1.6 \times 10^{-8} \text{ T}$ (2) $1.6 \times 10^{-7} \text{ T}$
 (3) $1.6 \times 10^{-6} \text{ T}$ (4) $1.6 \times 10^{-9} \text{ T}$
35. Two bodies of mass m and $9m$ are placed at a distance R . The gravitational potential on the line joining the bodies where the gravitational field equals zero, will be ($G = \text{gravitational constant}$)
 (1) $-\frac{12Gm}{R}$ (2) $-\frac{16Gm}{R}$
 (3) $-\frac{20Gm}{R}$ (4) $-\frac{8Gm}{R}$

Section – B (Attempt Any 10)

36. In the figure shown here, what is the equivalent focal length of the combination of lenses (Assume that all layers are thin)?

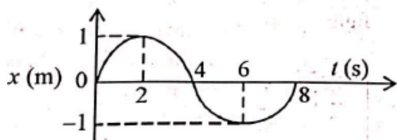


- (1) -40 cm (2) -100 cm
 (3) -50 cm (4) 40 cm
37. Calculate the maximum acceleration of a moving car so that a body lying on the floor of the car remains stationary. The coefficient of static friction between the body and the floor is 0.15 ($g = 10 \text{ m s}^{-2}$).
 (1) 150 m s^{-2} (2) 1.5 m s^{-2}
 (3) 50 m s^{-2} (4) 1.2 m s^{-2}

38. A satellite is orbiting just above the surface of the earth with period T . If d is the density of the earth and G is the universal constant of gravitation, the quantity $\frac{3\pi}{Gd}$ represents:

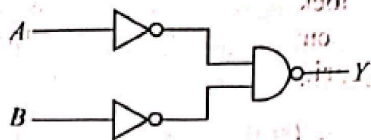
- (1) T^2 (2) T^3
 (3) \sqrt{T} (4) T

39. The x - t graph of a particle performing simple harmonic motion is shown in the figure. The acceleration of the particle at $t = 2$ s is:



- (1) $-\frac{\pi^2}{8} \text{ms}^{-2}$ (2) $\frac{\pi^2}{16} \text{ms}^{-2}$
 (3) $-\frac{\pi^2}{16} \text{ms}^{-2}$ (4) $\frac{\pi^2}{8} \text{ms}^{-2}$

40. For the following logic circuit, the truth table is:



- (1)

| A | B | Y |
|---|---|---|
| 0 | 0 | 0 |
| 0 | 1 | 1 |
| 1 | 0 | 1 |
| 1 | 1 | 1 |

 (2)

| A | B | Y |
|---|---|---|
| 0 | 0 | 1 |
| 0 | 1 | 0 |
| 1 | 0 | 1 |
| 1 | 1 | 0 |
- (3)

| A | B | Y |
|---|---|---|
| 0 | 0 | 0 |
| 0 | 1 | 0 |
| 1 | 0 | 0 |
| 1 | 1 | 1 |

 (4)

| A | B | Y |
|---|---|---|
| 0 | 0 | 1 |
| 0 | 1 | 1 |
| 1 | 0 | 1 |
| 1 | 1 | 0 |

41. A horizontal bridge is built across a river. A student standing on the bridge throws a small ball vertically upwards with a velocity 4 m s^{-1} . The ball strikes the water surface after 4 s. The height of bridge above water surface is (Take $g = 10 \text{ m s}^{-2}$):

- (1) 60 m (2) 64 m
 (3) 68 m (4) 56 m

42. Two thin lenses are of same focal lengths (f), but one is convex and the other one is concave. When they are placed in contact with each other, the equivalent focal length of the combination will be:

- (1) $f/4$ (2) $f/2$
 (3) Infinite (4) Zero

43. A wire carrying a current I along the positive x -axis has length L . It is kept in a magnetic field $\vec{B} = (2\hat{i} + 3\hat{j} - 4\hat{k})T$. The magnitude of the magnetic force acting on the wire is:

- (1) $\sqrt{5}IL$ (2) $5IL$
 (3) $\sqrt{3}IL$ (4) $3IL$

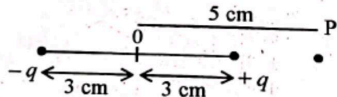
44. A bullet from a gun is fired on a rectangular wooden block with velocity u . When bullet travels 24 cm through the block along its length horizontally, velocity of bullet becomes $\frac{u}{3}$. Then it further penetrates into the block in the same direction before coming to rest exactly at the other end of the block. The total length of the block is:

- (1) 24 cm (2) 28 cm
 (3) 30 cm (4) 27 cm

45. The resistance of platinum wire at 0°C is 2Ω and 6.8Ω at 80°C . The temperature coefficient of resistance of the wire is:

- (1) $3 \times 10^{-3} \text{ }^\circ\text{C}^{-1}$ (2) $3 \times 10^{-2} \text{ }^\circ\text{C}^{-1}$
 (3) $3 \times 10^{-1} \text{ }^\circ\text{C}^{-1}$ (4) $3 \times 10^{-4} \text{ }^\circ\text{C}^{-1}$

46. An electric dipole is placed as shown in the figure.



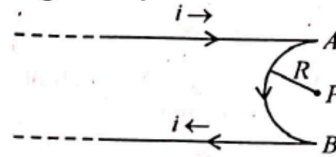
The electric potential (in 10^2 V) at point P due to the dipole is ($\epsilon_0 =$ permittivity of free space and $\frac{1}{4\pi\epsilon_0} = K$)

- (1) $\left(\frac{5}{8}\right)qK$ (2) $\left(\frac{8}{5}\right)qK$
 (3) $\left(\frac{8}{3}\right)qK$ (4) $\left(\frac{3}{8}\right)qK$

47. 10 resistors, each of resistance R are connected in series to a battery of emf E and negligible internal resistance. Then those are connected in parallel to the same battery, the current is increased n times. The value of n is:

- (1) 100 (2) 1
 (3) 1000 (4) 10

48. A very long conducting wire is bent in a semi-circular shape from A to B as shown in figure. The magnetic field at point P for steady current configuration is given by:

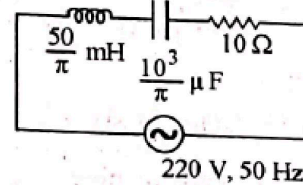


- (1) $\frac{\mu_0 i}{4R}$ pointed away from the page
 (2) $\frac{\mu_0 i}{4R} \left[1 - \frac{2}{\pi}\right]$ pointed away from page
 (3) $\frac{\mu_0 i}{4R} \left[1 - \frac{2}{\pi}\right]$ pointed into the page
 (4) $\frac{\mu_0 i}{4R}$ pointed into the page

49. The radius of inner most orbit of hydrogen atom is $5.3 \times 10^{-11}\text{ m}$. What is the radius of third allowed orbit of hydrogen atom?

- (1) 1.06 \AA (2) 1.59 \AA
 (3) 4.77 \AA (4) 0.53 \AA

50. The net impedance of circuit (as shown in figure) will be :



- (1) $15\text{ }\Omega$ (2) $5\sqrt{5}\text{ }\Omega$
 (3) $25\text{ }\Omega$ (4) $5\sqrt{2}\text{ }\Omega$

NEET RESULTS 2022

अद्भुत !
असाधारण !!
अतुल्य !!!



NOW @
KEM
MUMBAI

MEHEK BHARUKA

667 /720

STATE RANK 91



NOW @
AIIMS
BATHINDA

LAKSHIT PARIHAR

663 /720

NEET 2022

NAIR
MUMBAI



AAKASH
YADAV
641

NAIR
MUMBAI



RAFEA
SHAIKH
637

COOPER
MUMBAI



SUKANYA
SINGH
617

COOPER
MUMBAI



JAGDISH KUMAR
PATEL
616

IGMC
NAGPUR



PRATHAMESH
KULKARNI
599

GMC
KOLHAPUR



PUNEET
SOLANKI
588

GMC
AMBEJOGAI



REVIN
PATTAR
583

GMC
LATUR



SHREYAS
CHOUDHARY
582

GMC
LATUR



PURVI
THAKAR
581

GMC
JALGAON



KESAR
RATHOD
575

GMC
JALGAON



VAIBHAV
SHUKLA
572

GMC
JALGAON



DEEPIKA
KAPURIA
570

GMC
SATARA



KRISH
AMRELIA
570

KJ
MUMBAI



DIYA
PATEL
547



PIMS
LONI



NEEL
PARMAR
547

KMMC
MATHURA



MANSI
DUBEY
547

SSPMMC
SINHDURG



VINAYAK
DWIVEDI
547

PIMS
LONI



CHAHAL
JAISWAL
547

NKP
NAGPUR



AASTHA
TIWARI
547

SYMBIOSIS
PUNE



RIZA
MENON
547

NYT
KARJAT



DIVYA
SUTHAR
547

SSPMMC
SINHDURG



YASHRAJ
CHAVAN
547

SELECTION RATIO में मुंबई के सर्वश्रेष्ठ में से एक

NEET 2021


अद्भुत !
असाधारण !!
अतुल्य !!!



NOW @
AIIMS
BHOPAL

DARSHIT J.
689 /720
AIR EWS 45

NOW @
AIIMS
BHOPAL



VAIDEHI T.
687 /720

AIR : All India Rank

22 STUDENTS
SCORED ABOVE **500**



NIKITA M.

651

LTMMC, MUMBAI



CHIRAG P.

625

TNMC, MUMBAI



YASH S.

625

GMC, MUMBAI



CHIRAG D.

624

TNMC, MUMBAI



AKSHAT K.

604

GMC, NAGPUR



NIKITA P.

598

IGMC, NAGPUR



KATHA M.

593

GMC, ALIBAUG



AKSHIT P.

584

GMC, KOLHAPUR



SIYA M.

580

GMC, DHULE



ANURADHA S.

579

GMC, AKOLA



SAHER S.

573

GMC, CHANDRAPUR



CHINTAN T.

572

GMC, YAVATMAL



MAHEK B.

570



DEECHA P.

559

GMC, GONDIA

TSPH

IS

TSPH